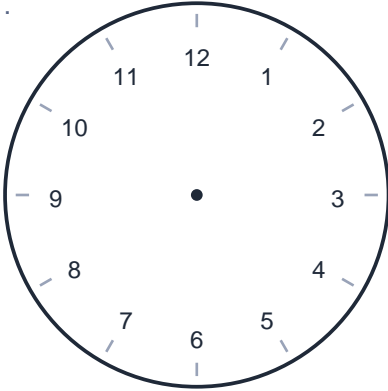
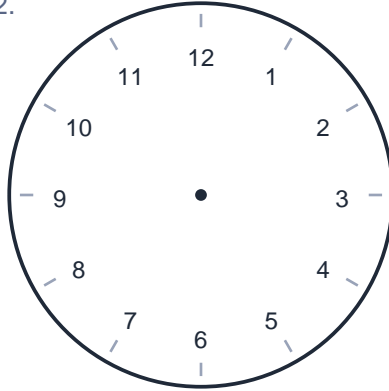


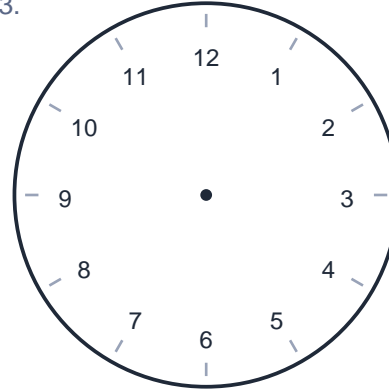
Draw the Time

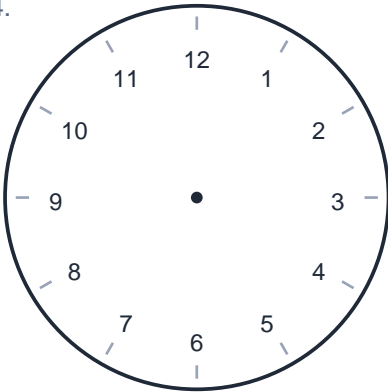
Name: _____ Date: _____

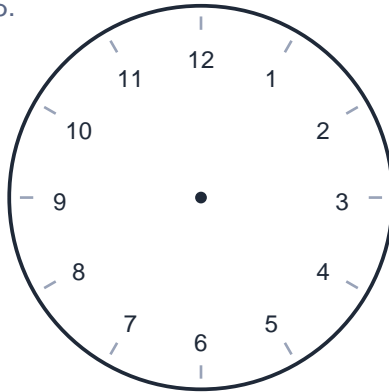
Draw the hour and minute hands to show each time.

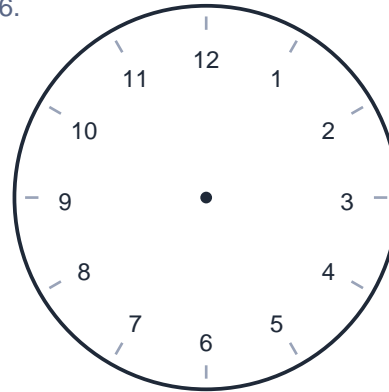
1. 
1:00

2. 
7:00

3. 
3:00

4. 
3:00

5. 
6:00

6. 
1:00

Draw the Time

Name: _____ Date: _____

Draw the hour and minute hands to show each time.

7.

11:30

8.

3:00

9.

11:30

10.

8:00

11.

10:00

12.

9:30


Draw the Time

Name: _____ Date: _____

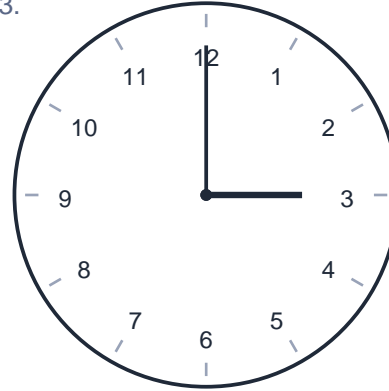
Draw the hour and minute hands to show each time.

1.  **1:00**

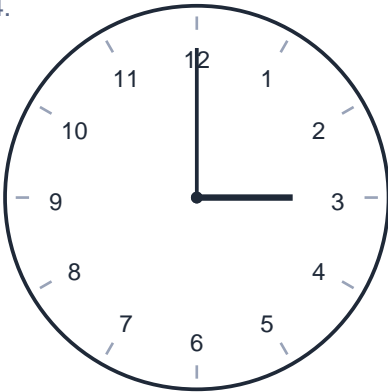
A circular clock face with numbers 1 through 12. The hour hand is a thick line pointing to the 1, and the minute hand is a thinner line pointing to the 12.

2.  **7:00**


A circular clock face with numbers 1 through 12. The hour hand is a thick line pointing to the 7, and the minute hand is a thinner line pointing to the 12.

3.  **3:00**


A circular clock face with numbers 1 through 12. The hour hand is a thick line pointing to the 3, and the minute hand is a thinner line pointing to the 12.

4.  **3:00**

A circular clock face with numbers 1 through 12. The hour hand is a thick line pointing to the 3, and the minute hand is a thinner line pointing to the 12.

5.  **6:00**

A circular clock face with numbers 1 through 12. The hour hand is a thick line pointing to the 6, and the minute hand is a thinner line pointing to the 12.

6.  **1:00**

A circular clock face with numbers 1 through 12. The hour hand is a thick line pointing to the 1, and the minute hand is a thinner line pointing to the 12.

Draw the Time

Name: _____ Date: _____

Draw the hour and minute hands to show each time.

