



Verify answers

PW

PW

PW

PW

PW

PW


# Count the Objects


Name: \_\_\_\_\_


Date: \_\_\_\_\_

How many objects are in each group? Write the number in the box.

1. 


2. 

3. 

4. 

5. 

6. 

7. 

8. 