



Name: _____ Date: _____

1. Angles on a straight line sum to 180° . If one angle is 63° , what is the missing angle?



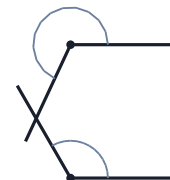
2. Angles around a point sum to 360° . If the known angle is 77° , what is the missing angle?



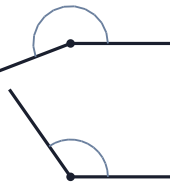
3. Angles around a point sum to 360° . If the known angle is 105° , what is the missing angle?



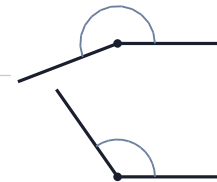
4. Angles around a point sum to 360° . If the known angle is 245° , what is the missing angle?



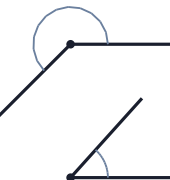
5. Angles around a point sum to 360° . If the known angle is 120° , what is the missing angle?



6. Angles around a point sum to 360° . If the known angle is 201° , what is the missing angle?



7. Angles around a point sum to 360° . If the known angle is 125° , what is the missing angle?




8. Angles around a point sum to 360° . If the known angle is 225° , what is the missing angle?

9. Angles around a point sum to 360° . If the known angle is 48° , what is the missing angle?



10. Angles on a straight line sum to 180° . If one angle is 95° , what is the missing angle?



Geometry: Angles Worksheets

Geometry: Angles · calculate-missing

Answers

Verify answers



-
1. 117°
 2. 283°
 3. 255°
 4. 115°
 5. 240°
 6. 159°
 7. 235°
 8. 135°
 9. 312°
 10. 85°