

Money / Coin Counting Worksheet

Worksheet

Count the Money · GBP

PW

PW

PW

PW

PW





PW

PW



Name: _____ Date: _____

Count the coins in each box and write the total.





1.

		Total
		<input type="text"/>





2.

		Total
		<input type="text"/>



3.

		Total
		<input type="text"/>






4.

		Total
		<input type="text"/>






5.

		Total
		<input type="text"/>


6.

			Total
			<input type="text"/>





7.

			Total
			<input type="text"/>



8.

			Total
			<input type="text"/>

9.

		Total
		<input type="text"/>

10.

			Total
			<input type="text"/>

PW

PW

PW

PW

PW

PW

PW

Money / Coin Counting Worksheet

Answers

Count the Money · GBP

PW

PW

PW


PW

PW

PW

PW


1.



Total

£0.62


2.



Total

£2.03


3.



Total

£3.01

4.



Total

£0.24

5.



Total

£2.01


6.



Total

£2.43


7.



Total

£2.19


8.



Total

£3.17

9.



Total

£3.02

10.



Total

£1.01

PW

PW

PW

PW

PW

PW

PW