

# Money / Coin Counting Worksheet

# Worksheet

Count the Money · GBP

PW

PW

PW

PW

PW

PW

PW

Name: \_\_\_\_\_ Date: \_\_\_\_\_


Count the coins in each box and write the total.

1.




Total

2.




Total

3.




Total

4.




Total

5.




Total

6.



Total

7.




Total

8.




Total

9.



Total

10.



Total

PW

PW

PW

PW

PW

PW

PW

# Money / Coin Counting Worksheet

## Answers

Count the Money · GBP

PW

PW

PW

PW

PW

PW

PW


1.



Total

**£20.02**


2.



Total

**£6.70**

3.



Total

**£0.10**


4.



Total

**£22.20**

5.



Total

**£12.80**


6.



Total

**£13.30**


7.



Total

**£12.03**


8.



Total

**£20.80**


9.



Total

**£0.60**

10.



Total

**£20.70**

PW

PW

PW

PW

PW

PW

PW