

# Money / Coin Counting Worksheet

# Worksheet

Count the Money · USD

PW

PW

PW

PW

PW


PW

PW

Name: \_\_\_\_\_ Date: \_\_\_\_\_

Count the coins in each box and write the total.

1.



1c      \$1      Total


2.



1c      1c      Total

10c      25c

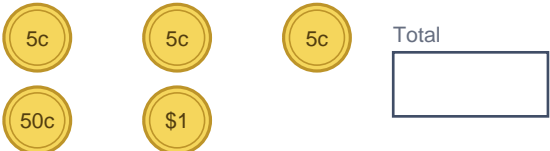
3.



1c      10c      10c      Total

25c      \$1


4.



5c      5c      5c      Total

50c      \$1

5.



1c      25c      Total

\$1


6.



1c      10c      Total

10c      \$1

7.



1c      25c      Total

50c


8.



1c      1c      Total


10c

9.



25c      50c      Total

10.



25c      25c      Total

PW

PW

PW

PW

PW

PW

PW

# Money / Coin Counting Worksheet

## Answers

Count the Money · USD

PW

PW

PW


PW

PW

PW

PW

1.



Total

**\$1.01**


2.



Total

**\$0.37**


3.



Total

**\$1.46**

4.



Total

**\$1.65**

5.



Total

**\$1.26**


6.



Total

**\$1.21**


7.



Total

**\$0.76**


8.



Total

**\$0.12**


9.



Total

**\$0.75**

10.



Total

**\$0.50**

PW

PW

PW

PW

PW

PW

PW