

Money / Coin Counting Worksheet

Worksheet

Count the Money · GBP

PW

PW

PW

PW

PW

PW

PW

Name: _____ Date: _____


Count the coins in each box and write the total.

1.




Box 1 contains five coins: two 1p coins, two 5p coins, and one 5p coin. To the right is a box labeled "Total" with a blank space for the answer.

2.



Box 2 contains three coins: one 1p coin, one 1p coin, and one 10p coin. To the right is a box labeled "Total" with a blank space for the answer.

3.




Box 3 contains two coins: one 10p coin and one 20p coin. To the right is a box labeled "Total" with a blank space for the answer.

4.




Box 4 contains six coins: two 5p coins, two 5p coins, one 10p coin, and two £2 coins. To the right is a box labeled "Total" with a blank space for the answer.

5.




Box 5 contains five coins: two 1p coins, one 10p coin, one 20p coin, and one 50p coin. To the right is a box labeled "Total" with a blank space for the answer.

6.




Box 6 contains five coins: one 1p coin, one 2p coin, one 20p coin, and two £2 coins. To the right is a box labeled "Total" with a blank space for the answer.

7.



Box 7 contains two coins: one 2p coin and one £1 coin. To the right is a box labeled "Total" with a blank space for the answer.

8.




Box 8 contains four coins: one 10p coin, one 50p coin, one £1 coin, and one £1 coin. To the right is a box labeled "Total" with a blank space for the answer.

9.



Box 9 contains five coins: two 2p coins, two 5p coins, one 5p coin, and two £2 coins. To the right is a box labeled "Total" with a blank space for the answer.

10.



Box 10 contains two coins: one 10p coin and one £2 coin. To the right is a box labeled "Total" with a blank space for the answer.

PW

PW

PW

PW

PW

PW

PW

Money / Coin Counting Worksheet

Answers

Count the Money · GBP

PW

PW

PW

PW

PW

PW

PW


1.



Total

£0.17


2.



Total

£0.12

3.



Total

£0.30

4.



Total

£4.20


5.



Total

£0.82

6.



Total

£4.23


7.



Total

£1.02


8.



Total

£2.60


9.



Total

£4.12

10.



Total

£2.10

PW

PW

PW

PW

PW

PW

PW