

# Money / Coin Counting Worksheet

# Worksheet

Count the Money · GBP

PW

PW

PW

PW

PW

PW

PW




Name: \_\_\_\_\_ Date: \_\_\_\_\_

Count the coins in each box and write the total.




1.

		Total
		<input type="text"/>




2.

		Total
		<input type="text"/>




3.

		Total
		<input type="text"/>






4.

		Total
		<input type="text"/>






5.

		Total
		<input type="text"/>

6.

			Total
			<input type="text"/>




7.

			Total
			<input type="text"/>





8.

		Total
		<input type="text"/>

9.

		Total
		<input type="text"/>

10.

		Total
		<input type="text"/>

PW

PW

PW

PW

PW

PW

PW

# Money / Coin Counting Worksheet

# Answers

Count the Money · GBP

PW

PW

PW

PW

PW

PW

PW


1.



Total

**£21.10**

2.



Total

**£1.21**


3.



Total

**£1.27**


4.



Total

**£10.11**


5.



Total

**£0.53**


6.



Total

**£21.22**

7.



Total

**£7.30**


8.



Total

**£1.20**


9.



Total

**£1.52**

10.



Total

**£4.60**

PW

PW

PW

PW

PW

PW

PW