

Money / Coin Counting Worksheet

Worksheet

Count the Money · GBP

PW

PW

PW

PW

PW


PW

PW

Name: _____ Date: _____

Count the coins in each box and write the total.

1.




Total

2.



Total

3.




Total

4.




Total

5.




Total

6.



Total

7.



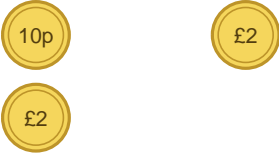
Total

8.



Total

9.



Total

10.



Total

PW

PW

PW

PW

PW

PW

PW

Money / Coin Counting Worksheet

Answers

Count the Money · GBP

PW

PW

PW



PW

PW

PW

PW

1.



Total

£1.52


2.



Total

£2.05

3.



Total

£3.56


4.



Total

£3.50

5.



Total

£0.23



6.



Total

£2.05


7.



Total

£2.75



8.



Total

£4.00

9.



Total

£4.10

10.



Total

£3.56

PW

PW

PW

PW

PW

PW

PW