

Money / Coin Counting Worksheet

Worksheet

Count the Money · EUR

PW

PW

PW

PW

PW






PW

PW





Name: _____ Date: _____

Count the coins in each box and write the total.


1.

			Total
			<input type="text"/>



2.

		Total
		<input type="text"/>



3.

		Total
		<input type="text"/>





4.

		Total
		<input type="text"/>

5.

		Total
		<input type="text"/>





6.

		Total
		<input type="text"/>





7.

		Total
		<input type="text"/>





8.

		Total
		<input type="text"/>

9.

		Total
		<input type="text"/>

10.

		Total
		<input type="text"/>

PW

PW

PW

PW

PW

PW

PW

Money / Coin Counting Worksheet

Answers

Count the Money · EUR

PW

PW

PW


PW

PW

PW

PW

1.



Total

?2.61


2.



Total

?4.12

3.



Total

?0.52

4.



Total

?0.03


5.



Total

?0.22

6.



Total

?2.07


7.



Total

?0.22


8.



Total

?0.62


9.



Total

?2.75

10.



Total

?1.42

PW

PW

PW

PW

PW

PW

PW