

Money / Coin Counting Worksheet

Worksheet

Count the Money · GBP

PW

PW

PW

PW

PW

PW

PW




Name: _____ Date: _____

Count the coins in each box and write the total.




1.

			Total
			<input type="text"/>




2.

		Total
		<input type="text"/>





3.

		Total
		<input type="text"/>





4.

		Total
		<input type="text"/>





5.

		Total
		<input type="text"/>





6.

		Total
		<input type="text"/>





7.

		Total
		<input type="text"/>



8.

		Total
		<input type="text"/>

9.

		Total
		<input type="text"/>

10.

			Total
			<input type="text"/>

PW

PW

PW

PW

PW

PW

PW

Money / Coin Counting Worksheet

Answers

Count the Money · GBP

PW

PW

PW

PW

PW

PW

PW


1.



Total

£1.52


2.



Total

£1.30


3.



Total

£0.30


4.



Total

£0.81


5.



Total

£3.21


6.



Total

£2.71


7.



Total

£2.45


8.



Total

£2.51

9.



Total

£2.31

10.



Total

£1.76

PW

PW

PW

PW

PW

PW

PW