




Name: _____ Date: _____

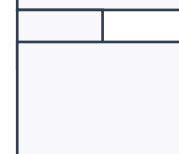
1. Triangle with base 8 cm and height 9 cm. Find the area.



2. An L-shape combines a 10 cm × 6 cm rectangle with a 3 cm × 2 cm rectangle. Find the total area.




3. Rectangle 14 cm by 8 cm. Find the area.



4. Triangle with sides 11 cm, 8 cm and 11 cm. Find the perimeter.



5. Rectangle 6 cm by 6 cm. Find the perimeter.



6. Rectangle 14 cm by 7 cm. Find the area.




7. Triangle with sides 12 cm, 6 cm and 11 cm. Find the perimeter.




8. Rectangle 11 cm by 7 cm. Find the perimeter.



9. An L-shape combines a 8 cm × 4 cm rectangle with a 5 cm × 6 cm rectangle. Find the total area.



10. Rectangle 4 cm by 7 cm. Find the area.



Perimeter and Area Worksheets

Perimeter & Area · mixed · both

Answers

Verify answers



-
- PW PW PW PW PW PW
1. 36 cm^2
 2. 66 cm^2
 3. 112 cm^2
 4. 30 cm
 5. 24 cm
 6. 98 cm^2
 7. 29 cm
 8. 36 cm
 9. 62 cm^2
 10. 28 cm^2