



PW

PW

PW


PW

PW

PW

Name: \_\_\_\_\_ Date: \_\_\_\_\_

1. An L-shape combines a 8 cm × 6 cm rectangle with a 7 cm × 5 cm rectangle along its base. Estimate the perimeter using the diagram.



2. Square with side 7 cm. Find the perimeter.




3. Square with side 12 cm. Find the perimeter.

4. An L-shape combines a 9 cm × 4 cm rectangle with a 7 cm × 2 cm rectangle along its base. Estimate the perimeter using the diagram.




5. Rectangle 5 cm by 3 cm. Find the perimeter.



6. Square with side 9 cm. Find the perimeter.




7. Rectangle 10 cm by 2 cm. Find the perimeter.



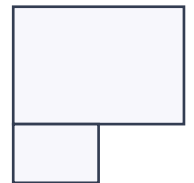
8. Rectangle 9 cm by 9 cm. Find the perimeter.



9. Rectangle 4 cm by 10 cm. Find the perimeter.



10. An L-shape combines a 4 cm × 5 cm rectangle with a 2 cm × 3 cm rectangle along its base. Estimate the perimeter using the diagram.



PW

PW

PW

PW

PW

PW

PW

# Perimeter and Area Worksheets

Perimeter & Area · mixed · perimeter

Answers

Verify answers



- 
- PW PW PW PW PW PW
1. 38 cm
  2. 28 cm
  3. 48 cm
  4. 30 cm
  5. 16 cm
  6. 36 cm
  7. 24 cm
  8. 36 cm
  9. 28 cm
  10. 24 cm