




Name: _____ Date: _____

1. Square with side 8 cm. Find the area.




2. Square with side 10 cm. Find the area.




3. An L-shape combines a 8 cm × 8 cm rectangle with a 4 cm × 6 cm rectangle. Find the total area.




4. Square with side 6 cm. Find the area.




5. An L-shape combines a 5 cm × 8 cm rectangle with a 4 cm × 4 cm rectangle. Find the total area.



6. An L-shape combines a 4 cm × 7 cm rectangle with a 3 cm × 6 cm rectangle. Find the total area.



7. Square with side 6 cm. Find the area.



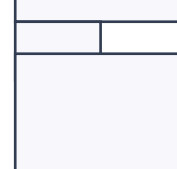
8. An L-shape combines a 8 cm × 8 cm rectangle with a 5 cm × 5 cm rectangle. Find the total area.



9. An L-shape combines a 6 cm × 3 cm rectangle with a 4 cm × 5 cm rectangle. Find the total area.



10. Rectangle 13 cm by 7 cm. Find the area.



Perimeter and Area Worksheets

Perimeter & Area · mixed · area

Answers

Verify answers



-
1. 64 cm^2
 2. 100 cm^2
 3. 88 cm^2
 4. 36 cm^2
 5. 56 cm^2
 6. 46 cm^2
 7. 36 cm^2
 8. 89 cm^2
 9. 38 cm^2
 10. 91 cm^2