





Order by Size

Write a number in each box to order the shapes from smallest to largest (1 = smallest).

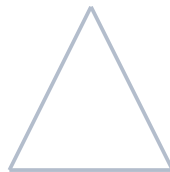

Set 1



Set 2



Set 3




Set 4




Order by Size - Answer Key

Write a number in each box to order the shapes from smallest to largest (1 = smallest).

Set 1




2




4



1



5



3


Set 2



5



3



4




2



1

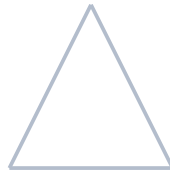
Set 3



5



1



4



3



2

Set 4



5



2



1



3



4