







Order by Size

Write a number in each box to order the shapes from smallest to largest (1 = smallest).




Set 1






Set 2



Set 3




Set 4



Order by Size - Answer Key

Write a number in each box to order the shapes from smallest to largest (1 = smallest).


Set 1




4



1




2




3


Set 2



2



3




4



1


Set 3




4



1




2



3


Set 4




2



1



4



3