













### Order by Size

Write a number in each box to order the shapes from smallest to largest (1 = smallest).







#### Set 1

					
<input type="text"/>	<input type="text"/>	<input type="text"/>	<input type="text"/>	<input type="text"/>	<input type="text"/>







#### Set 2

					
<input type="text"/>	<input type="text"/>	<input type="text"/>	<input type="text"/>	<input type="text"/>	<input type="text"/>

#### Set 3

					
<input type="text"/>	<input type="text"/>	<input type="text"/>	<input type="text"/>	<input type="text"/>	<input type="text"/>

#### Set 4

					
<input type="text"/>	<input type="text"/>	<input type="text"/>	<input type="text"/>	<input type="text"/>	<input type="text"/>

## Order by Size - Answer Key

Write a number in each box to order the shapes from smallest to largest (1 = smallest).

### Set 1

5      3      1      2      6      4

### Set 2

4      2      1      5      6      3

### Set 3

4      5      2      3      1      6

### Set 4

2      4      6      3      1      5