


## Order by Size

Write a number in each box to order the shapes from smallest to largest (1 = smallest).


### Set 1



### Set 2



### Set 3



### Set 4




## Order by Size - Answer Key

Write a number in each box to order the shapes from smallest to largest (1 = smallest).

### Set 1




2



4



1



5



3


### Set 2



5



3



4



2



1


### Set 3



5



1



4



3



2

### Set 4



5



2



1



3



4