




Lines of Symmetry

Name: _____

Date: _____

1. How many lines of symmetry?



Lines: _____

2. How many lines of symmetry?



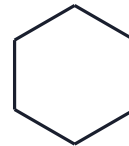
Lines: _____

3. How many lines of symmetry?



Lines: _____

4. How many lines of symmetry?



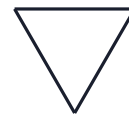
Lines: _____

5. How many lines of symmetry?



Lines: _____

6. How many lines of symmetry?



Lines: _____



PW

PW

PW


PW

PW

PW

Lines of Symmetry

1. How many lines of symmetry?



Lines: _____
Answer: infinite lines

2. How many lines of symmetry?



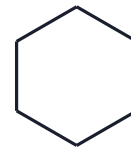
Lines: _____
Answer: 4 lines

3. How many lines of symmetry?



Lines: _____
Answer: 2 lines

4. How many lines of symmetry?



Lines: _____
Answer: 6 lines

5. How many lines of symmetry?



Lines: _____
Answer: 2 lines

6. How many lines of symmetry?



Lines: _____
Answer: 3 lines

PW

PW

PW

PW

PW

PW

PW