



PW

PW

PW

PW

PW

PW

Lines of Symmetry

Name: _____

Date: _____


1. How many lines of symmetry?

M

Lines: _____

2. Complete the mirror image.

X




3. How many lines of symmetry?

T

Lines: _____

4. Complete the mirror image.

X




5. How many lines of symmetry?

X

Lines: _____

6. Complete the mirror image.

T





PW

PW

PW

PW

PW

PW

Lines of Symmetry

1. How many lines of symmetry?



Lines: _____
Answer: 1 line

2. Complete the mirror image.




Answer: Letter X - reflect across the mirror line

3. How many lines of symmetry?



Lines: _____
Answer: 1 line

4. Complete the mirror image.



Answer: Letter X - reflect across the mirror line

5. How many lines of symmetry?



Lines: _____
Answer: 2 lines

6. Complete the mirror image.



Answer: Letter T - reflect across the mirror line