



PW

PW

PW

PW

PW

PW

Lines of Symmetry

Name: _____

Date: _____

1. Complete the mirror image.



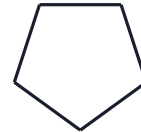
2. Complete the mirror image.




3. Complete the mirror image.



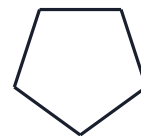
4. Complete the mirror image.



5. Complete the mirror image.



6. Complete the mirror image.





PW

PW

PW

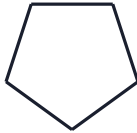
PW

PW

PW

Lines of Symmetry

1. Complete the mirror image.



Answer: Regular pentagon - reflect across the mirror line

2. Complete the mirror image.



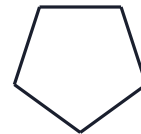
Answer: Square - reflect across the mirror line

3. Complete the mirror image.




Answer: Square - reflect across the mirror line

4. Complete the mirror image.



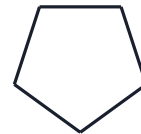
Answer: Regular pentagon - reflect across the mirror line

5. Complete the mirror image.



Answer: Circle - reflect across the mirror line

6. Complete the mirror image.



Answer: Regular pentagon - reflect across the mirror line

PW

PW

PW

PW

PW

PW

PW