



PW

PW

PW

PW

PW


PW

# Lines of Symmetry

Name: \_\_\_\_\_

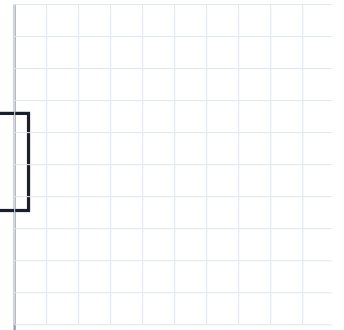
Date: \_\_\_\_\_

1. How many lines of symmetry?



Lines: \_\_\_\_\_

2. Complete the mirror image.




3. How many lines of symmetry?

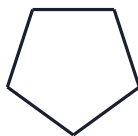


Lines: \_\_\_\_\_

4. Complete the mirror image.





5. How many lines of symmetry?



Lines: \_\_\_\_\_


6. Complete the mirror image.





# Lines of Symmetry

1. How many lines of symmetry?



Lines: \_\_\_\_\_  
Answer: infinite lines

2. Complete the mirror image.



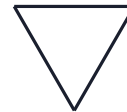
Answer: Rectangle - reflect across the mirror line

3. How many lines of symmetry?



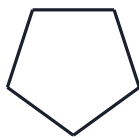
Lines: \_\_\_\_\_  
Answer: 2 lines

4. Complete the mirror image.




Answer: Equilateral triangle - reflect across the mirror line

5. How many lines of symmetry?



Lines: \_\_\_\_\_  
Answer: 5 lines

6. Complete the mirror image.



Answer: Circle - reflect across the mirror line