



PW

PW

PW

PW

PW

PW

# Lines of Symmetry

Name: \_\_\_\_\_


Date: \_\_\_\_\_

1. How many lines of symmetry?



Lines: \_\_\_\_\_

2. Complete the mirror image.




3. How many lines of symmetry?



Lines: \_\_\_\_\_

4. Complete the mirror image.




5. How many lines of symmetry?



Lines: \_\_\_\_\_

6. Complete the mirror image.





PW

PW

PW

PW

PW

PW

# Lines of Symmetry

1. How many lines of symmetry?



Lines: \_\_\_\_\_  
Answer: 2 lines

2. Complete the mirror image.




Answer: Letter A - reflect across the mirror line

3. How many lines of symmetry?



Lines: \_\_\_\_\_  
Answer: 2 lines

4. Complete the mirror image.



Answer: Letter X - reflect across the mirror line

5. How many lines of symmetry?



Lines: \_\_\_\_\_  
Answer: 2 lines

6. Complete the mirror image.



Answer: Letter O - reflect across the mirror line