



PW

PW

PW

PW

PW

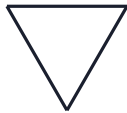
PW

# Lines of Symmetry

Name: \_\_\_\_\_

Date: \_\_\_\_\_


1. Complete the mirror image.




2. Complete the mirror image.



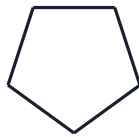
3. Complete the mirror image.



4. Complete the mirror image.



5. Complete the mirror image.



6. Complete the mirror image.





PW

PW

PW

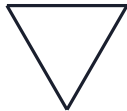
PW

PW

PW

# Lines of Symmetry

1. Complete the mirror image.



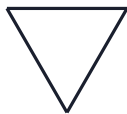
Answer: Equilateral triangle - reflect across the mirror line

2. Complete the mirror image.




Answer: Square - reflect across the mirror line

3. Complete the mirror image.



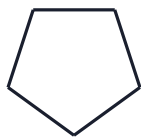
Answer: Equilateral triangle - reflect across the mirror line

4. Complete the mirror image.



Answer: Circle - reflect across the mirror line

5. Complete the mirror image.



Answer: Regular pentagon - reflect across the mirror line

6. Complete the mirror image.



Answer: Square - reflect across the mirror line