



PW

PW

PW

PW

PW

PW

Lines of Symmetry

Name: _____

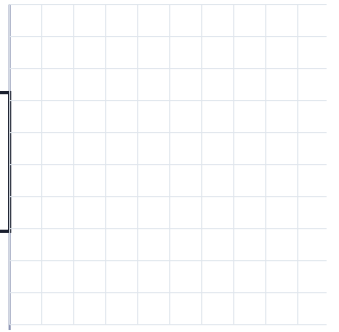
Date: _____

1. How many lines of symmetry?

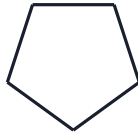


Lines: _____

2. Complete the mirror image.





3. How many lines of symmetry?



Lines: _____

4. Complete the mirror image.

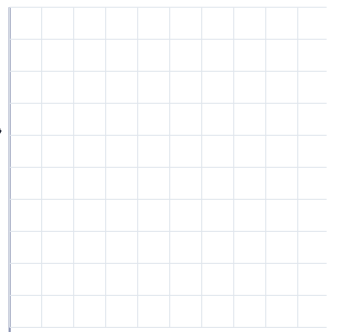
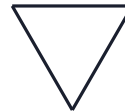


5. How many lines of symmetry?



Lines: _____

6. Complete the mirror image.





PW

PW

PW

PW

PW

PW

Lines of Symmetry

1. How many lines of symmetry?



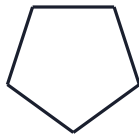
Lines: _____
Answer: 2 lines

2. Complete the mirror image.




Answer: Square - reflect across the mirror line

3. How many lines of symmetry?



Lines: _____
Answer: 5 lines

4. Complete the mirror image.



Answer: Circle - reflect across the mirror line

5. How many lines of symmetry?



Lines: _____
Answer: 4 lines

6. Complete the mirror image.



Answer: Equilateral triangle - reflect across the mirror line

PW

PW

PW

PW

PW

PW

PW