



Telling Time

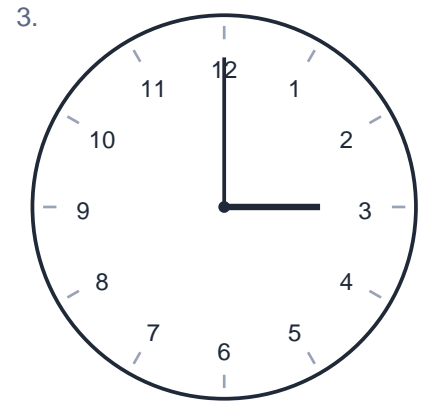
Name: _____

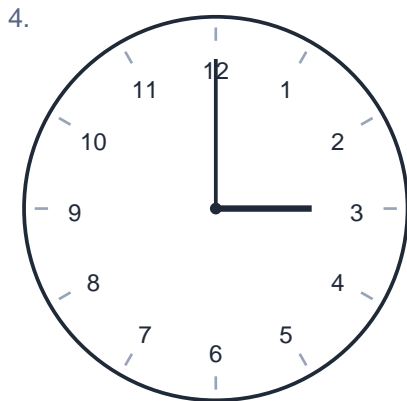
Date: _____

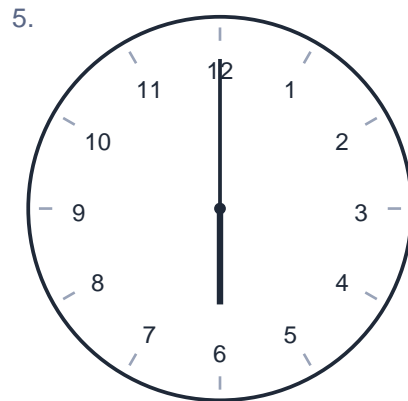
Write the time shown on each clock.

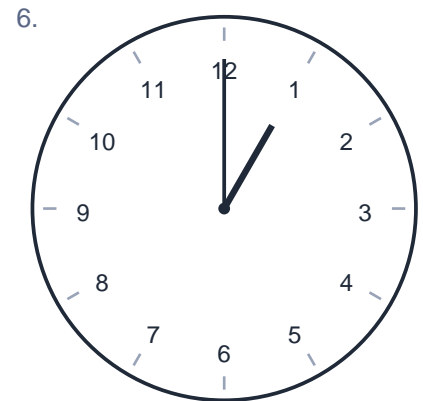








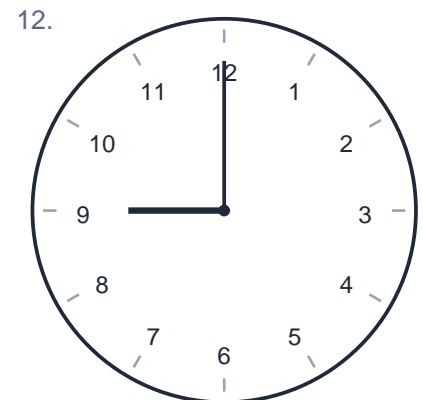

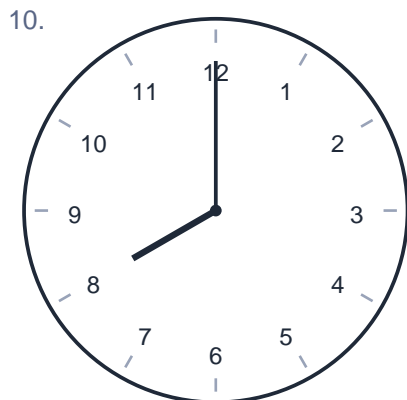

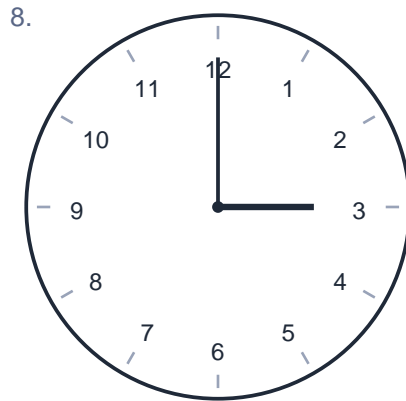





Telling Time

Name: _____ Date: _____


Write the time shown on each clock.




Telling Time

Name: _____ Date: _____

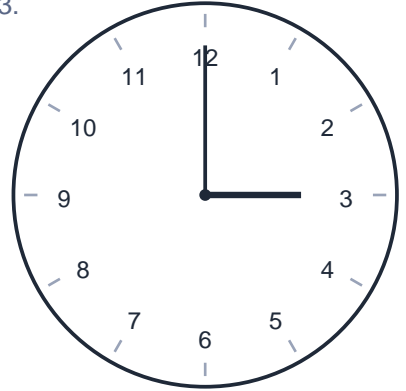
Write the time shown on each clock.

1.  **1:00**

An analog clock with numbers 1 through 12. The hour hand is pointing exactly at the 1, and the minute hand is pointing exactly at the 12.

2.  **7:00**


An analog clock with numbers 1 through 12. The hour hand is pointing exactly at the 7, and the minute hand is pointing exactly at the 12.

3.  **3:00**


An analog clock with numbers 1 through 12. The hour hand is pointing exactly at the 3, and the minute hand is pointing exactly at the 12.

4.  **3:00**

An analog clock with numbers 1 through 12. The hour hand is pointing exactly at the 3, and the minute hand is pointing exactly at the 12.

5.  **6:00**

An analog clock with numbers 1 through 12. The hour hand is pointing exactly at the 6, and the minute hand is pointing exactly at the 12.

6.  **1:00**

An analog clock with numbers 1 through 12. The hour hand is pointing exactly at the 1, and the minute hand is pointing exactly at the 12.

Telling Time

Name: _____ Date: _____


Write the time shown on each clock.

7.  **11:00**

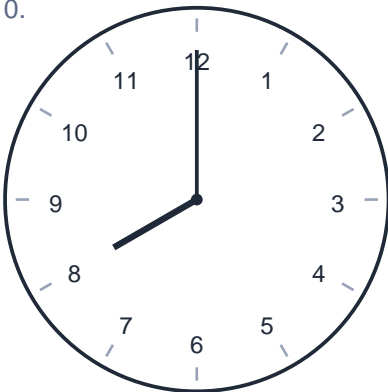
An analog clock with numbers 1 through 12. The hour hand points to 11 and the minute hand points to 12.

8.  **3:00**


An analog clock with numbers 1 through 12. The hour hand points to 3 and the minute hand points to 12.

9.  **11:00**

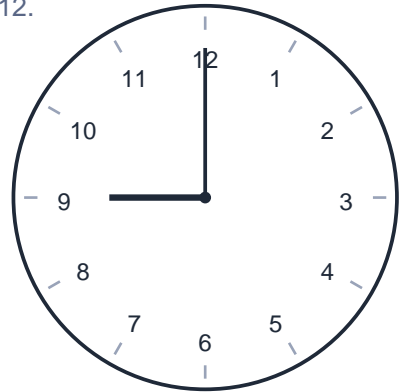
An analog clock with numbers 1 through 12. The hour hand points to 11 and the minute hand points to 12.

10.  **8:00**

An analog clock with numbers 1 through 12. The hour hand points to 8 and the minute hand points to 12.

11.  **10:00**

An analog clock with numbers 1 through 12. The hour hand points to 10 and the minute hand points to 12.

12.  **9:00**

An analog clock with numbers 1 through 12. The hour hand points to 9 and the minute hand points to 12.