
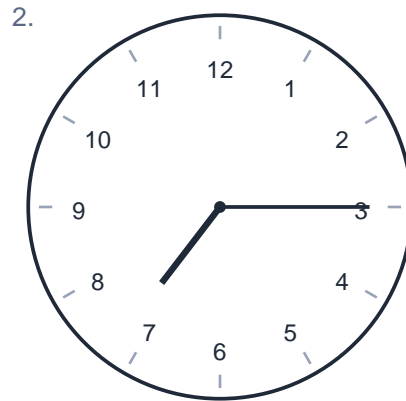


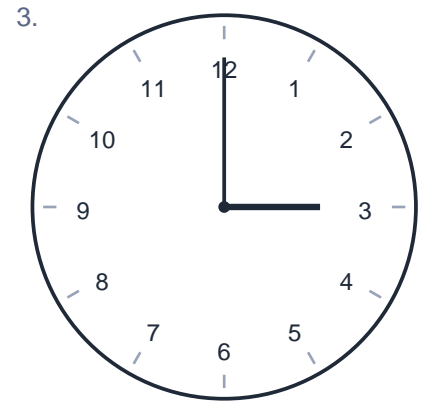
Telling Time

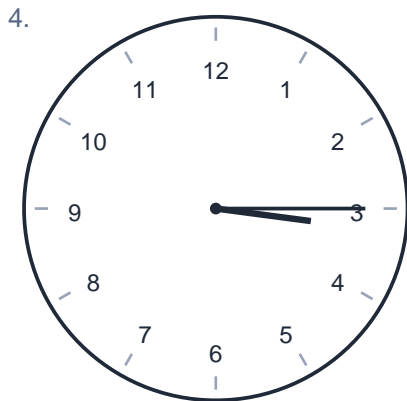
Name: _____ Date: _____

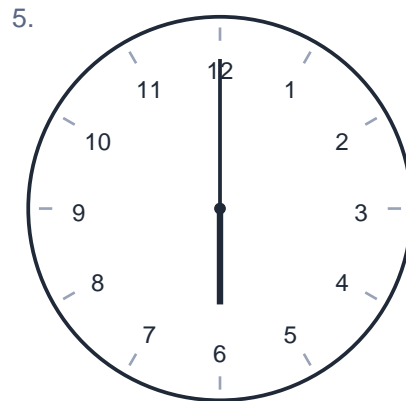
Write the time shown on each clock.

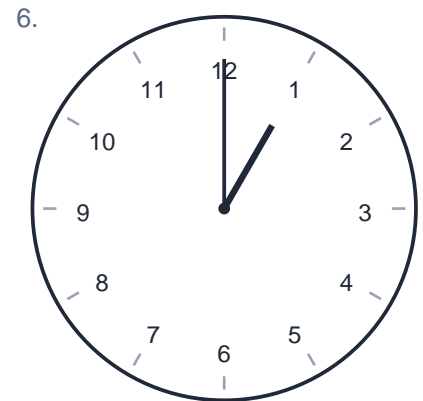








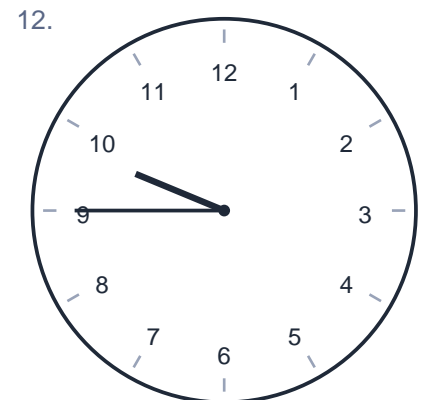

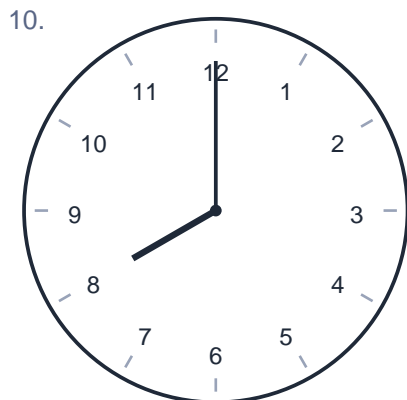
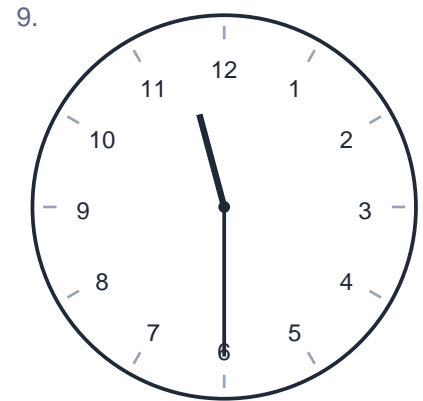
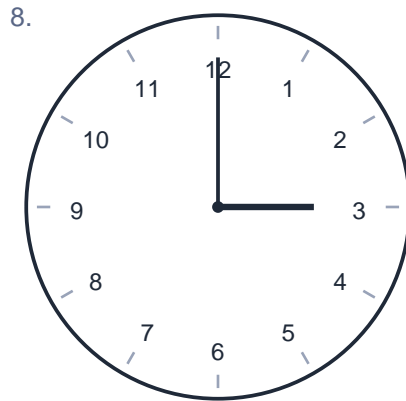
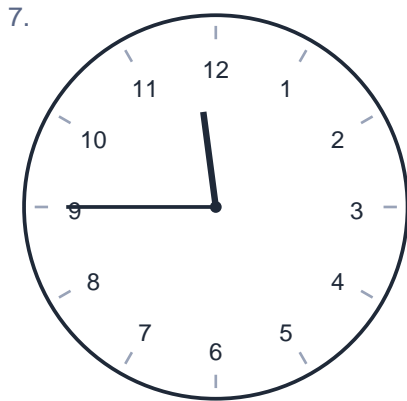




Telling Time

Name: _____ Date: _____

Write the time shown on each clock.




Telling Time

Name: _____ Date: _____

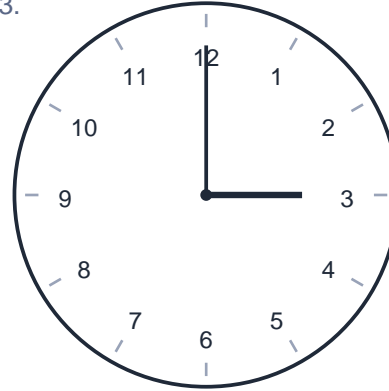
Write the time shown on each clock.

1.  **1:15**

An analog clock with numbers 1 through 12. The hour hand is between 1 and 2, and the minute hand is pointing to 3.

2.  **7:15**


An analog clock with numbers 1 through 12. The hour hand is between 7 and 8, and the minute hand is pointing to 3.

3.  **3:00**


An analog clock with numbers 1 through 12. The hour hand is pointing to 3 and the minute hand is pointing to 12.

4.  **3:15**

An analog clock with numbers 1 through 12. The hour hand is between 3 and 4, and the minute hand is pointing to 3.

5.  **6:00**

An analog clock with numbers 1 through 12. The hour hand is pointing to 6 and the minute hand is pointing to 12.

6.  **1:00**

An analog clock with numbers 1 through 12. The hour hand is pointing to 1 and the minute hand is pointing to 12.

Telling Time

Name: _____ Date: _____

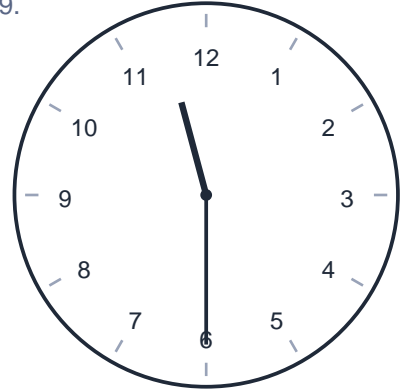
Write the time shown on each clock.

7.  **11:45**

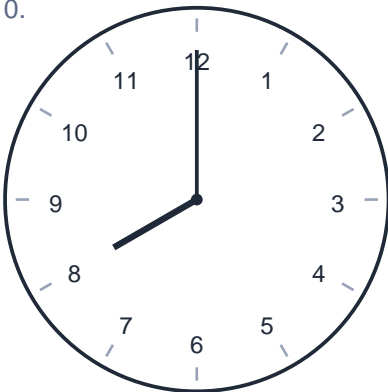
An analog clock with numbers 1 through 12. The hour hand is between 11 and 12, closer to 12. The minute hand is pointing to 9.

8.  **3:00**

An analog clock with numbers 1 through 12. The hour hand is pointing to 3. The minute hand is pointing to 12.

9.  **11:30**

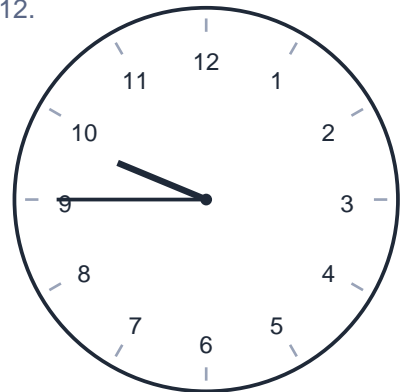
An analog clock with numbers 1 through 12. The hour hand is between 11 and 12. The minute hand is pointing to 6.

10.  **8:00**

An analog clock with numbers 1 through 12. The hour hand is pointing to 8. The minute hand is pointing to 12.

11.  **10:15**

An analog clock with numbers 1 through 12. The hour hand is between 10 and 11. The minute hand is pointing to 3.

12.  **9:45**

An analog clock with numbers 1 through 12. The hour hand is between 9 and 10. The minute hand is pointing to 9.