
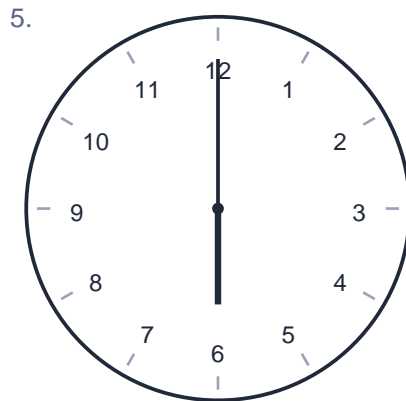
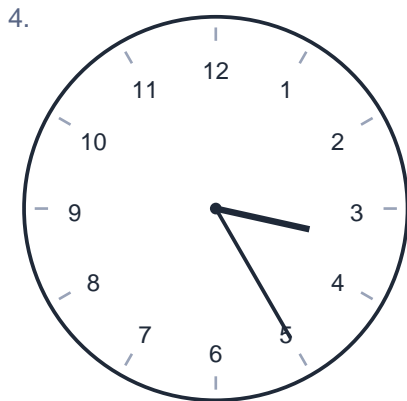

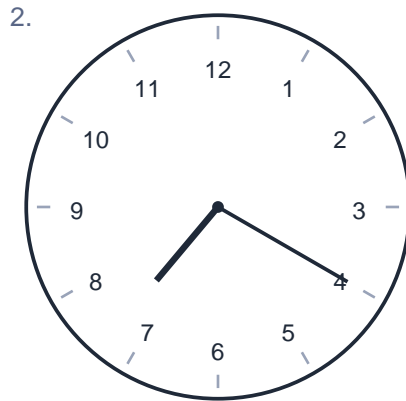
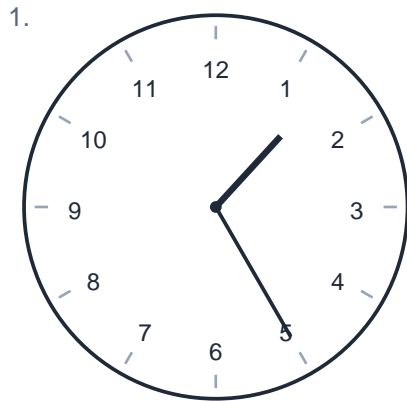


Telling Time

Name: _____ Date: _____




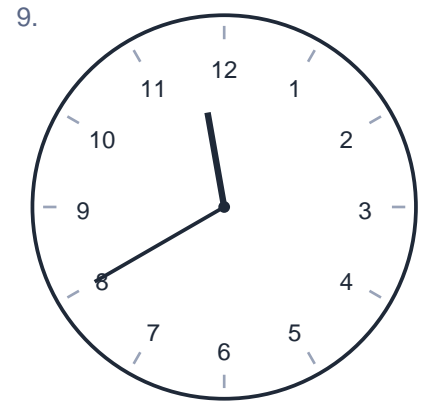
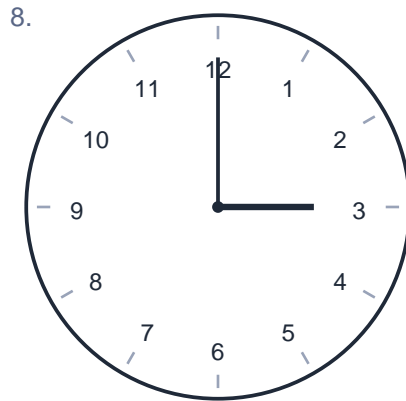
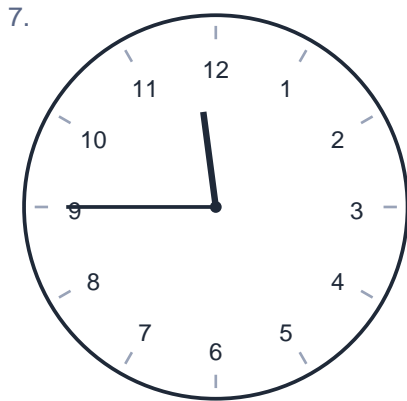
Write the time shown on each clock.



Telling Time

Name: _____ Date: _____


Write the time shown on each clock.



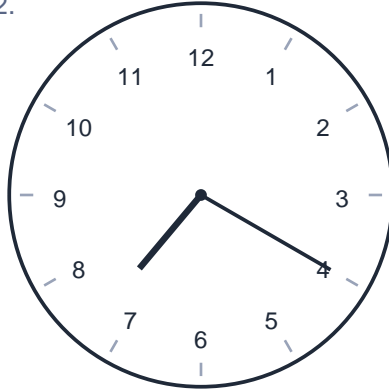
Telling Time

Name: _____ Date: _____


Write the time shown on each clock.

1.  **1:25**

An analog clock with numbers 1 through 12. The hour hand is between 1 and 2, closer to 1. The minute hand points to 5.

2.  **7:20**


An analog clock with numbers 1 through 12. The hour hand is between 7 and 8, closer to 7. The minute hand points to 4.

3.  **3:10**


An analog clock with numbers 1 through 12. The hour hand is between 3 and 4, closer to 3. The minute hand points to 2.

4.  **3:25**

An analog clock with numbers 1 through 12. The hour hand is between 3 and 4, closer to 3. The minute hand points to 5.

5.  **6:00**

An analog clock with numbers 1 through 12. The hour hand points to 6. The minute hand points to 12.

6.  **1:05**

An analog clock with numbers 1 through 12. The hour hand is slightly past 1. The minute hand points to 1.

Telling Time

Name: _____ Date: _____

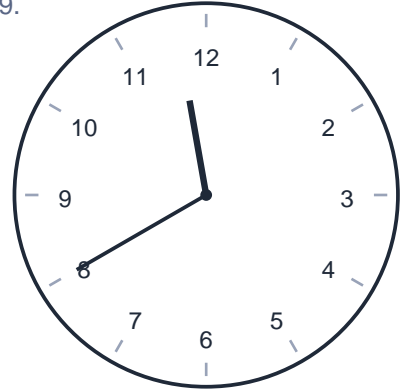
Write the time shown on each clock.

7.  **11:45**

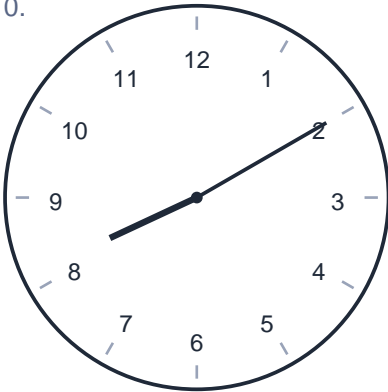
An analog clock with numbers 1 through 12. The hour hand is between 11 and 12, closer to 12. The minute hand points to 9.

8.  **3:00**

An analog clock with numbers 1 through 12. The hour hand points to 3. The minute hand points to 12.

9.  **11:40**


An analog clock with numbers 1 through 12. The hour hand is between 11 and 12, closer to 12. The minute hand points to 8.

10.  **8:10**

An analog clock with numbers 1 through 12. The hour hand is between 8 and 9, closer to 8. The minute hand points to 2.

11.  **10:15**

An analog clock with numbers 1 through 12. The hour hand is between 10 and 11, closer to 10. The minute hand points to 3.

12.  **9:50**

An analog clock with numbers 1 through 12. The hour hand is between 9 and 10, closer to 10. The minute hand points to 10.