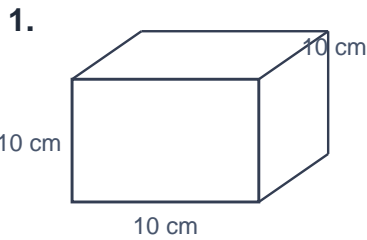


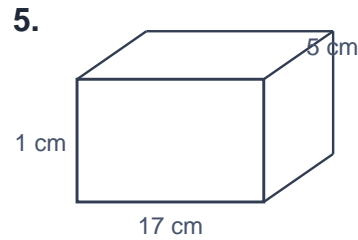
Volume

Name: _____ Date: _____

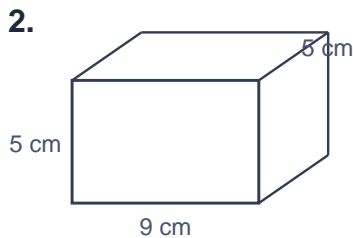
Work out the volume of each cuboid (length \times width \times height). Give your answer in cm^3 .



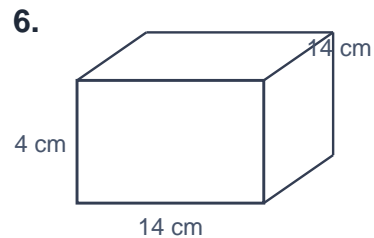
Volume = _____ cm^3



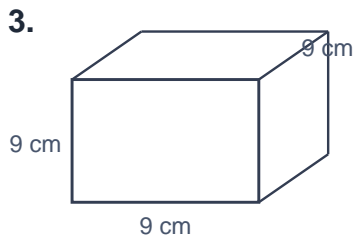
Volume = _____ cm^3



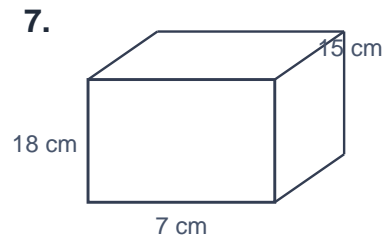
Volume = _____ cm^3



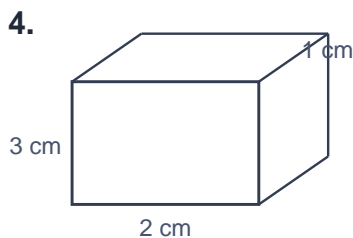
Volume = _____ cm^3



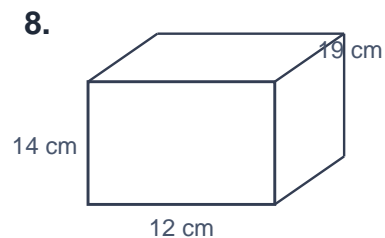
Volume = _____ cm^3



Volume = _____ cm^3



Volume = _____ cm^3



Volume = _____ cm^3